

Thursday 28 February 2013 – Afternoon

GCSE MATHEMATICS B

J567/03 Paper 3 (Higher Tier)

Candidates answer on the Question Paper.

OCR supplied materials:
None

Other materials required:

- Geometrical instruments
- Tracing paper (optional)

Duration: 1 hour 45 minutes



Candidate forename		Candidate surname	
-----------------------	--	----------------------	--

Centre number						Candidate number				
---------------	--	--	--	--	--	------------------	--	--	--	--

INSTRUCTIONS TO CANDIDATES

- Write your name, centre number and candidate number in the boxes above. Please write clearly and in capital letters.
- Use black ink. HB pencil may be used for graphs and diagrams only.
- Answer **all** the questions.
- Read each question carefully. Make sure you know what you have to do before starting your answer.
- Your answers should be supported with appropriate working. Marks may be given for a correct method even if the answer is incorrect.
- Write your answer to each question in the space provided. Additional paper may be used if necessary but you must clearly show your candidate number, centre number and question number(s).
- Do **not** write in the bar codes.

INFORMATION FOR CANDIDATES

- The number of marks is given in brackets [] at the end of each question or part question.
- Your Quality of Written Communication is assessed in questions marked with an asterisk (*).
- The total number of marks for this paper is **100**.
- This document consists of **20** pages. Any blank pages are indicated.

WARNING



No calculator can be used for this paper

This paper has been pre modified for carrier language

Formulae Sheet: Higher Tier

Area of trapezium = $\frac{1}{2}(a + b)h$



Volume of prism = (area of cross-section) \times length



In any triangle ABC

Sine rule $\frac{a}{\sin A} = \frac{b}{\sin B} = \frac{c}{\sin C}$

Cosine rule $a^2 = b^2 + c^2 - 2bc \cos A$

Area of triangle = $\frac{1}{2}ab \sin C$



Volume of sphere = $\frac{4}{3}\pi r^3$

Surface area of sphere = $4\pi r^2$



Volume of cone = $\frac{1}{3}\pi r^2 h$

Curved surface area of cone = $\pi r l$



The Quadratic Equation

The solutions of $ax^2 + bx + c = 0$,
where $a \neq 0$, are given by

$$x = \frac{-b \pm \sqrt{b^2 - 4ac}}{2a}$$

PLEASE DO NOT WRITE ON THIS PAGE

- 1 One day 300 people visit a museum.
The ratio of adults to children is 2 : 3.

(a) Work out the number of adults and the number of children.

(a) Adults _____ Children _____ [2]

(b) This two-way table summarises some information about the visitors to the museum.

(i) Complete the table.

	Adults	Children	Total
Male			132
Female		100	
Total			300

[1]

(ii) One of the adults is chosen at random.

Find the probability that the adult is a male.

(b)(ii) _____ [2]

(iii) Find the ratio of male to female visitors.
Write the ratio in its simplest form.

(iii) _____ : _____ [2]

2 *Fresh Clean* and *Cleanup* are two home cleaning companies.

- (a) *Fresh Clean* charges £3.50 for each room they clean and an extra £15 call out charge. Write down a formula for the total charge, £ F , for cleaning a house with n rooms.

(a) _____ [2]

- (b) *Cleanup* uses this formula to work out the total charge to clean a house.

$$C = 25h + 10$$

C is the total charge in £ for a clean taking h hours.

Pete's house has 8 rooms and will take $1\frac{1}{2}$ hours to clean.

Which of the two cleaning companies, *Fresh Clean* or *Cleanup*, will be cheaper and by how much?

(b) _____ by £ _____ [3]

3 (a) Multiply out.

$$a(3 + a)$$

(a) _____ [1]

(b) Factorise.

$$4b - 12$$

(b) _____ [1]

(c) Rearrange this formula to make p the subject.

$$T = 4p + 5$$

(c) $p =$ _____ [2]

(d) Solve this inequality.

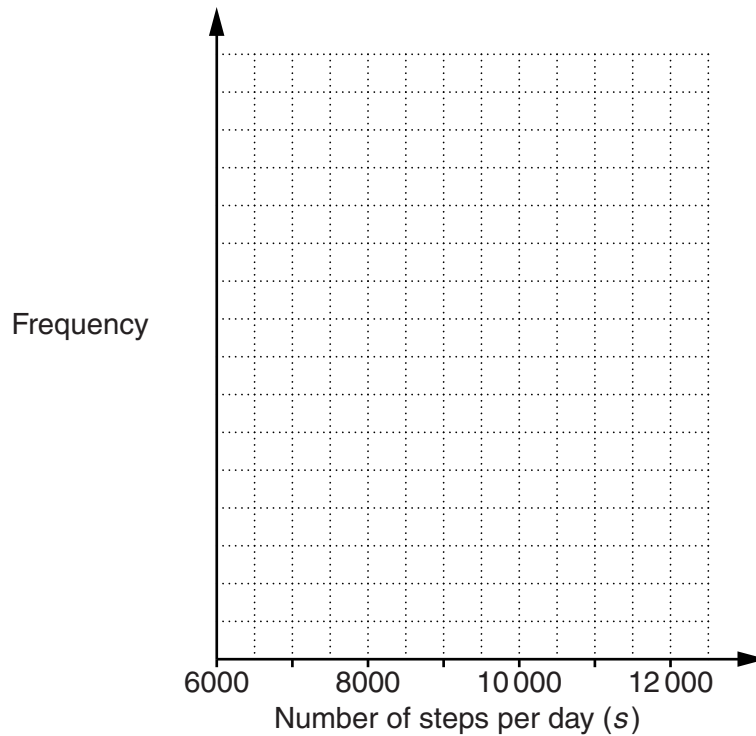
$$3x - 6 < x + 4$$

(d) _____ [3]

- 4 Sofia uses a pedometer to record the number of steps she takes each day for one month. Her results are summarised in the table below.

Steps per day (s)	Frequency
$6000 \leq s < 7000$	3
$7000 \leq s < 8000$	4
$8000 \leq s < 9000$	6
$9000 \leq s < 10000$	8
$10000 \leq s < 11000$	7
$11000 \leq s < 12000$	2

- (a) Draw a frequency polygon to display this information.



[3]

- (b) Write down the modal class of the number of steps per day.

(b) _____ [1]

- (c) Sofia reads that taking at least 10 000 steps per day is an important part of a healthy lifestyle.

For what percentage of the month did she meet this target?

(c) _____ % [2]

- (d) One day Sofia goes for a walk in the hills.
The length of the walk is 7 km, correct to the nearest kilometre.

What is the longest possible length of Sofia's walk?

(d) _____ km [1]

- 5 Kate thinks of a number.
She multiplies it by 3 and then adds 3.

Leo thinks of the same number as Kate.
He subtracts 5 and then multiplies the result by 6.

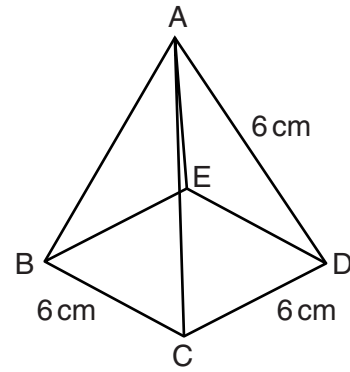
Kate and Leo both end up with the same number.

Find the numbers that they start and end with.


Start _____

End _____ [4]

- 6 ABCDE is a square-based pyramid.
The length of each edge is 6 cm.



- (a) Construct a full-size net of the pyramid.
The base is drawn for you.



[2]

(b) Use measurements from your diagram to calculate the total surface area of the pyramid.

(b) _____ cm² [4]

7 (a) The price of a printer is £64.50 excluding VAT.

Calculate the price of the printer including VAT at 20%.

(a) £ _____ [3]

(b) The price of a season ticket is increased by 10% in January 2012 and then by another 10% in January 2013.

Calculate the overall percentage increase in the price of the season ticket.

(b) _____ % [3]

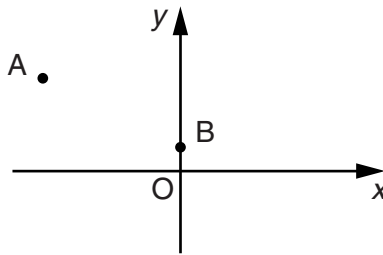
- 8 (a) Find the size of the exterior angle of a regular 12-sided polygon.

(a) _____ ° [2]

- (b) Hence find the size of the interior angle of a regular 12-sided polygon.

(b) _____ ° [1]

- 9 In the sketch below, A is the point $(-10, 8)$ and B is the point $(0, 3)$.



- (a) Find the coordinates of the midpoint of the line AB.

(a) (_____ , _____) [2]

- (b) Find the equation of the line AB.

(b) _____ [3]

10 (a) Work out.

$$2\frac{2}{5} \div 2\frac{1}{4}$$

Give your answer as a mixed number in its simplest form.

(a) _____ [3]

(b) Write down the reciprocal of 5.

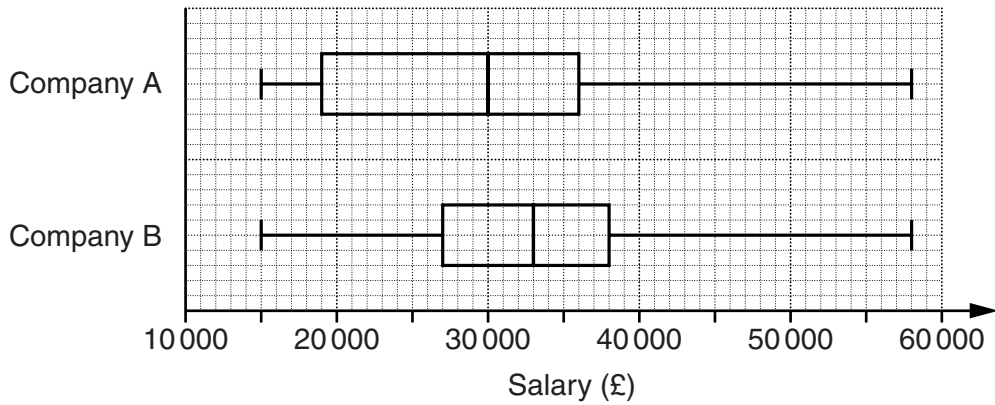
(b) _____ [1]

(c) Write as a single power of 5.

$$5^6 \div 5^{-3}$$

(c) _____ [1]

11 These box plots represent data for the salaries of the employees working in two companies.



(a) Find the median for company A.

(a) £ _____ [1]

(b) Find the interquartile range for company B.

(b) £ _____ [2]

(c) Make two different comparisons between the salaries in the two companies.

1 _____

2 _____
 _____ [2]

- 12 State which calculation, in each of the following pairs, has an incorrect answer. Explain how you can tell without giving the correct answer.

(a)

A	$300 \times 4000 = 12\,000$
---	-----------------------------

B	$0.003 \times 0.04 = 0.00012$
---	-------------------------------

Calculation _____ has an incorrect answer

because _____ [1]

(b)

C	$6497 \times 1.08 = 7016.76$
---	------------------------------

D	$5684 \div 0.96 = 5456.64$
---	----------------------------

Calculation _____ has an incorrect answer

because _____ [1]

(c)

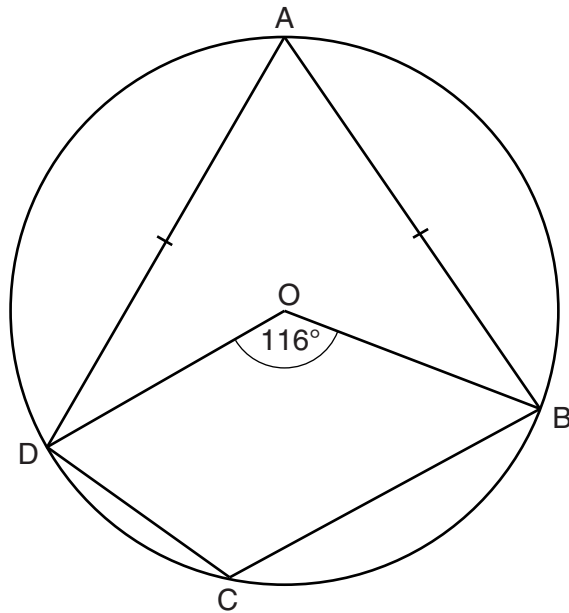
E	$5.8 \times 10^{-3} \times 1.2 \times 10^{-2} = 6.96 \times 10^{-5}$
---	--

F	$4.6 \times 10^8 \div 3.7 \times 10^2 = 1.24 \times 10^4$
---	---

Calculation _____ has an incorrect answer

because _____ [1]

- 13 In the diagram, A, B, C and D are points on the circle centre O.
 $AB = AD$ and angle $BOD = 116^\circ$.



Not to scale

Calculate

(a) angle BAD ,

(a) _____ $^\circ$ [1]

(b) angle BCD ,

(b) _____ $^\circ$ [1]

(c) angle ABO .

(c) _____ $^\circ$ [2]

14 (a) Solve algebraically these simultaneous equations.

$$6x + 2y = 5$$

$$4x - 5y = 16$$

(a) $x =$ _____

$y =$ _____ [4]

(b) Factorise and solve.

$$6x^2 + 11x - 10 = 0$$

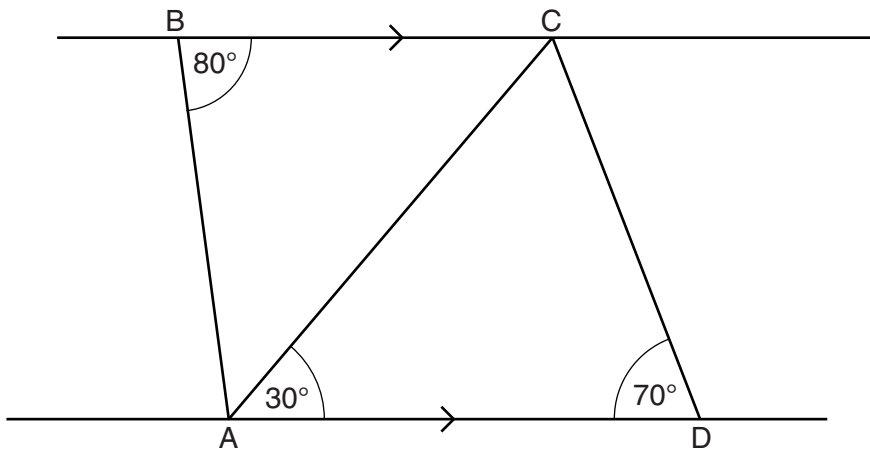
(b) $x =$ _____ and $x =$ _____ [3]

- 15 (a) A photo is 12 cm wide by 10 cm high.
An enlargement of the photo is 15 cm wide.

Calculate the height of the enlargement.

(a) _____ cm [3]

- (b) In the diagram, AD is parallel to BC.
Angle ABC = 80° , angle CAD = 30° and angle ADC = 70° .



Not to scale

Show that triangles ABC and DCA are similar.

[3]

16 Vector $\mathbf{p} = \begin{pmatrix} 4 \\ -2 \end{pmatrix}$ and vector $\mathbf{q} = \begin{pmatrix} -3 \\ 5 \end{pmatrix}$.

Calculate.

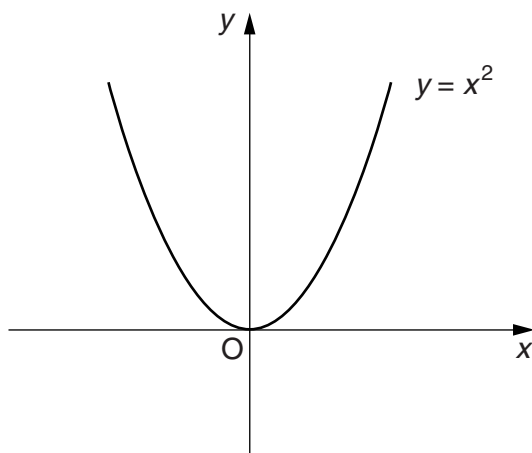
(a) $\mathbf{p} + \mathbf{q}$

(a) $\begin{pmatrix} \\ \end{pmatrix}$ [1]

(b) $3\mathbf{p} - \mathbf{q}$

(b) $\begin{pmatrix} \\ \end{pmatrix}$ [2]

17 This sketch shows the graph of $y = x^2$.



(a) On the same axes, sketch the graph of $y = 2x^2$. [1]

(b) Describe the transformation that maps the graph of $y = x^2$ onto $y = x^2 - 3$.

_____ [2]

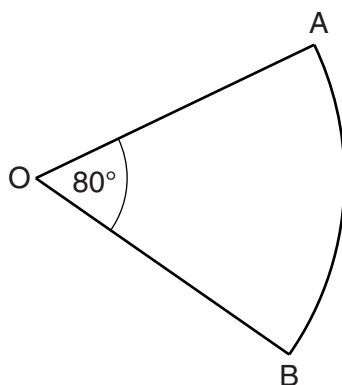
18 Simplify.

$$\frac{6 + \sqrt{2}}{\sqrt{2}}$$

Give your answer in the form $a\sqrt{2} + b$.

_____ [3]

19 OAB is a sector of a circle.
Angle AOB = 80° .



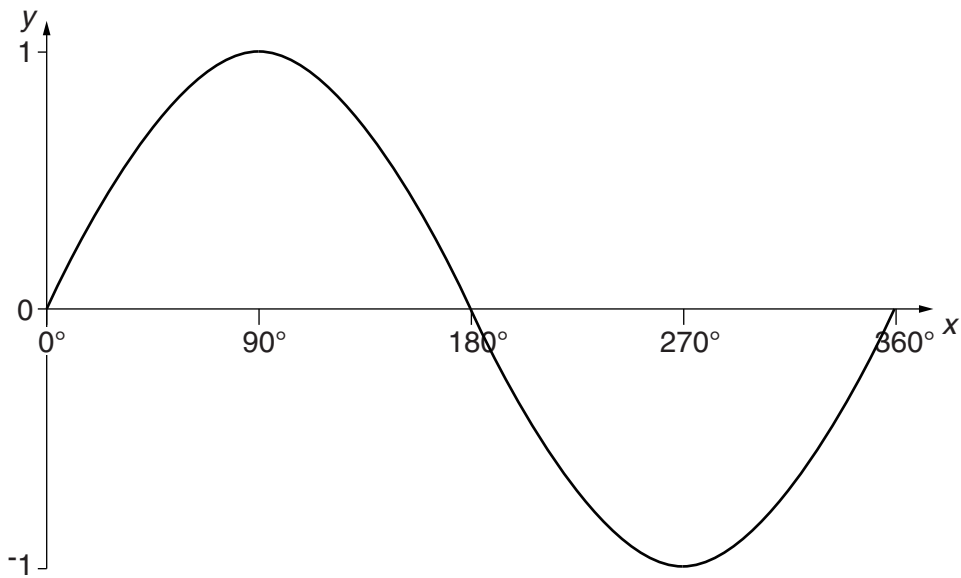
Not to scale

The length of arc AB is 12π cm.

Find the perimeter of the sector.
Give your answer in the form $a + b\pi$.

_____ [4]

20 The diagram shows the graph of $y = \sin x$ for $0^\circ \leq x \leq 360^\circ$.



One solution to the equation $\sin x = 0.8$ is $x = 53^\circ$, correct to the nearest degree.

Find the values of x which satisfy $\sin x = -0.8$ in the range $0^\circ \leq x \leq 360^\circ$.

$x =$ _____ [2]

TURN OVER FOR QUESTION 21

21* Jamie organises a game to raise money for charity.

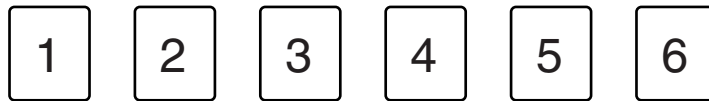
Number Generator Game

£1 per go

Pick 2 cards

Win £5
for a number greater than 55

He shuffles these six cards and places them face down on a table.



Players pick a card at random and place it in the *First card* position on the grid below. They then pick a second card at random and place it in the *Second card* position on the grid.

<i>First card</i>	<i>Second card</i>
<input style="width: 40px; height: 40px;" type="text"/>	<input style="width: 40px; height: 40px;" type="text"/>

Explain why £5 may not be an appropriate prize for this game.

[5]

END OF QUESTION PAPER

Copyright Information

Contact the Copyright Team, First Floor, 9 Hills Road, Cambridge CB2 1GE.

OCR is part of the Cambridge Assessment Group; Cambridge Assessment is the brand name of University of Cambridge Local Examinations Syndicate (UCLES), which is itself a department of the University of Cambridge.